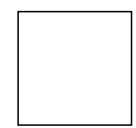



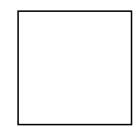



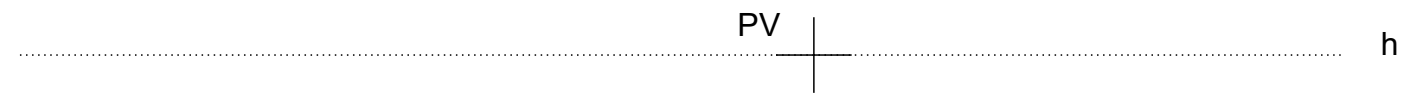


A'



A

h



PV

h



Dibuixeu la perspectiva cònica del conjunt.
 Feu el dibuix en el mateix full, a partir del punt de vista donat, doblant les mides.